

Settlement

Total for this question: 25 marks

(a) Study the following list about a large urban area in an MEDC:

- large department store
- farm
- town hall
- reservoir

(i) Tick the two that are most likely to be found in a Central Business District (CBD).
(2 marks)

(ii) For a CBD you have studied, explain the land uses found there.

.....

.....

.....

.....

.....

.....

.....

.....

.....

.....

.....

.....

.....

.....

.....

.....

.....

.....

.....

.....

.....

.....

(4 marks)

(b) Study Figure 4, a model of a large urban area in an MEDC.

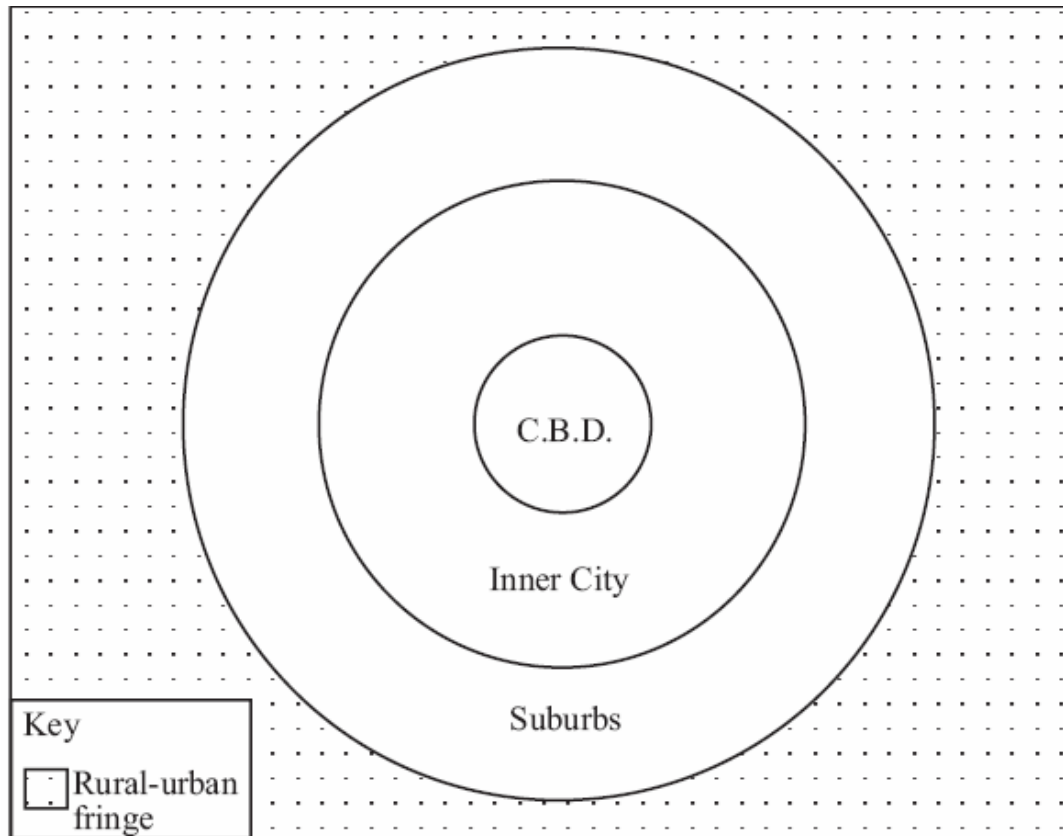


Figure 4

(i) Using Figure 4, fill in the gaps in the following sentences:

In a large urban area, theis found in the centre. Near the edge of the large urban area are the In between the CBD and the suburbs is an area known as the Outside the large urban area is the

(4 marks)

(ii) State two features of suburbs.

- 1.....
.....
.....
.....
- 2.....
.....
.....
.....

(2 marks)

(c) Study Figure 5, a sketch map of the site of Lincoln.

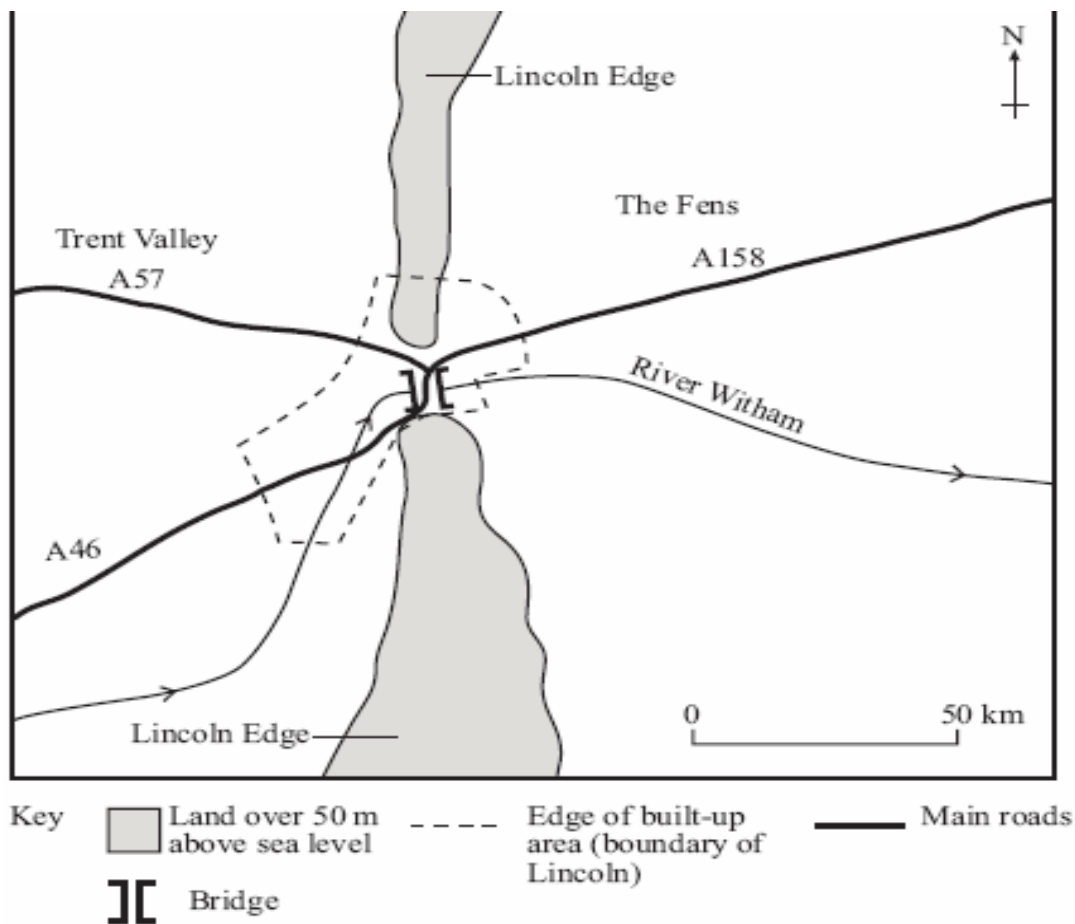


Figure 5

(i) Name the area which is over 50 m above sea level.

.....
.....
.....
.....

(1 mark)

(ii) Suggest two reasons for the site of Lincoln.

1.....
.....
.....
.....
2.....
.....
.....
.....

(2 marks)

(d) Study Figure 6, a sketch map of part of a shanty town.

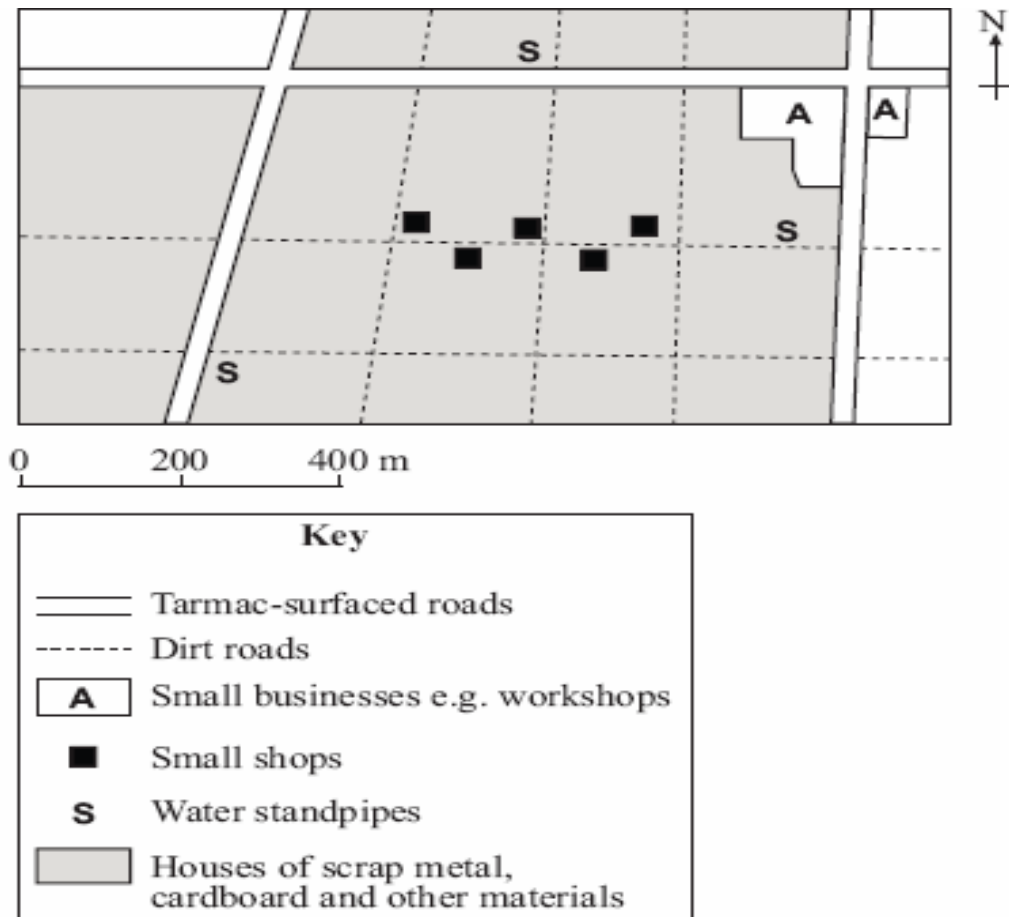


Figure 6

(i) Using Figure 6, give two features which you would not expect to find within a city in an MEDC.

- 1.....

 2.....

(2 marks)

